


Event A: The Expansion of the Persian Empire


Metaphor Questions for Event A: Which of the two teams in the drawing would best represent the Persians? The Greeks? What could you add to the drawing to show the immense wealth of the Persian Empire? How could you more vividly show the disunity that existed among the Greek city-states? How could you show that the Persian Empire was unified under one political leader? Why is the score 00 to 00?

Event A: The Expansion of the Persian Empire




Event B: The Ionian Revolt

Metaphor Questions for Event B: Which player in this drawing could represent Ionia? Athens? What could you add to the drawing to show that Ionia received help from Athens? What do the two remaining Greek players in the drawing represent? What could you add to the drawing to show Sparta's refusal to help Ionia? How could you show Darius's feelings toward the Athenians? What score might best represent the fact that the Persians crushed the Ionian Revolt?

Event B: The Ionian Revolt


Event C: The Battle of Marathon

Metaphor Questions for Event C: Why does the drawing show the “P” players failing to stop a “G” player from scoring? What could you add to the drawing to show the Persian commander’s decision to place his cavalry on ships? How could you show Miltiades acting as the leader of the Greek army? How could you show Sparta’s delay in sending troops to Marathon? What score would best reflect the outcome of the battle of Marathon?

Event C: The Battle of Marathon

Event D: The Battle of Thermopylae

Metaphor Questions for Event D: Why does the drawing show a new coach for the “P” team? What could you add to the drawing to show the enormous army that Xerxes put together? How are the Greek city-states who did not fight against the Persians represented in the drawing? How could you show the Spartan army being slaughtered? What score might best represent the severe losses the Persians suffered when defeating the Greeks at Thermopylae?

Event D: The Battle of Thermopylae

Event E: The Battle of Salamis

Metaphor Questions for Event E: Why does the drawing show the “G” players scoring with ease? How could you show Themistocles’ plan for luring the Persians to Salamis? What do the entangled “P” players represent? How could you show the losses the Persians suffered at Salamis? How could you show Xerxes’ actions after the Battle of Salamis? What score might best reflect the outcome of the Battle of Salamis?

Event E: The Battle of Salamis

